

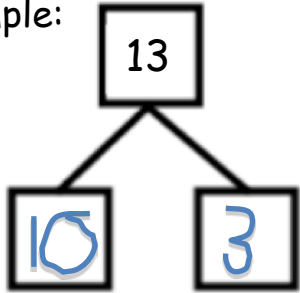


Name _____

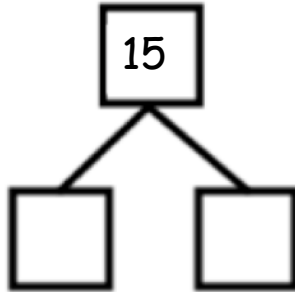
Date _____

Fill in each number bond, and write a number sentence to match them.

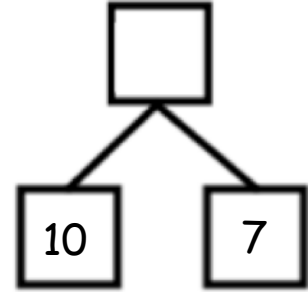
Example:



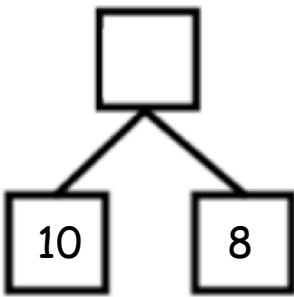
$13 = 10 + 3$



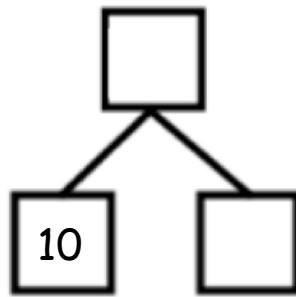
$15 = \underline{\quad} + \underline{\quad}$



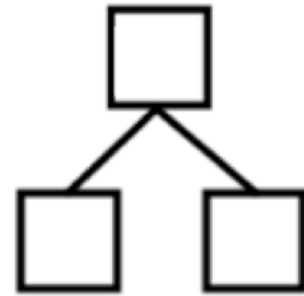
$17 = \underline{\quad} + \underline{\quad}$



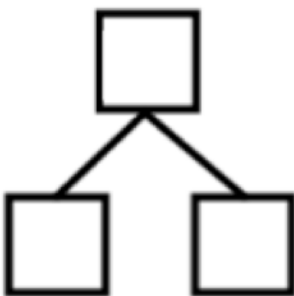
$10 + 8 = \underline{\quad}$



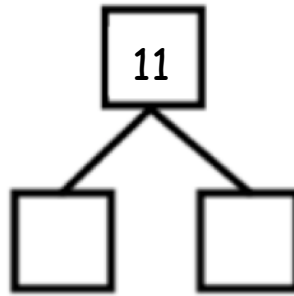
$10 + 6 = \underline{\quad}$



$\underline{\quad} = 10 + 4$



$12 = \underline{\quad} + \underline{\quad}$



$\underline{\quad} = \underline{\quad} + \underline{\quad}$

Early finishers:
Make up your own
teen number
bonds and number
sentences on the
back!